
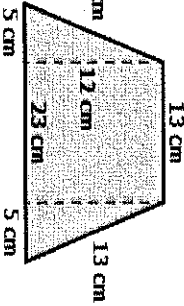


**Tri 2 Final - Quick Six**

Name \_\_\_\_\_


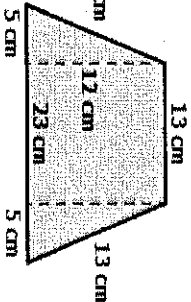
Show all of your work. You can use the back of this sheet if you need more space.

$\frac{5}{6} \cdot \frac{2}{9}$	<p>Create a portion web.</p> 	<p><u>Group &amp; Simplify</u></p> $3 \cdot (-3) - 2 \cdot (-4)$
$(4.2)(-2.3)$	<p>Find the <u>area</u> and <u>perimeter</u> of the trapezoid below:</p>  <p>Area _____</p> <p>Perimeter _____</p>	<p><u>Group &amp; Simplify</u></p> $5 + 3(10 - 4 \cdot 2) - 3(8 - 2 \cdot 3)$

**Tri 2 Final - Quick Six**

Name \_\_\_\_\_

Show all of your work. You can use the back of this sheet if you need more space.

$\frac{5}{6} \cdot \frac{2}{9}$	<p>Create a portion web.</p> 	<p><u>Group &amp; Simplify</u></p> $3 \cdot (-3) - 2 \cdot (-4)$
$(4.2)(-2.3)$	<p>Find the <u>area</u> and <u>perimeter</u> of the trapezoid below:</p>  <p>Area _____</p> <p>Perimeter _____</p>	<p><u>Group &amp; Simplify</u></p> $5 + 3(10 - 4 \cdot 2) - 3(8 - 2 \cdot 3)$